


Name: _____

Date: _____



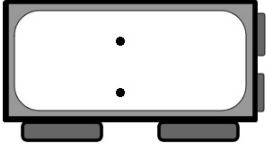
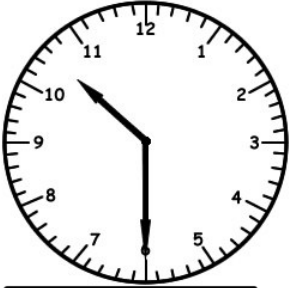
Telling Time

Half Hour Worksheet 1

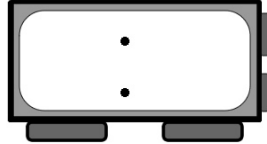


Write the time inside each clock below.

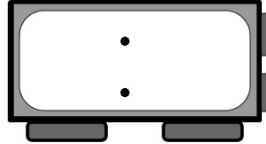
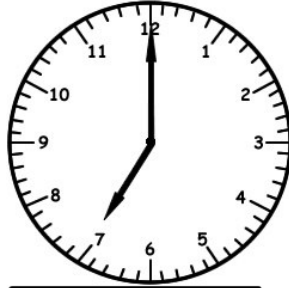
1)



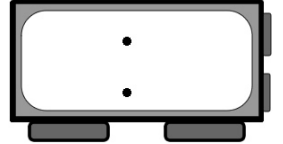
2)



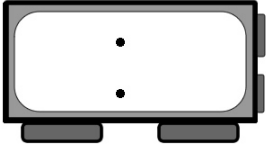

3)



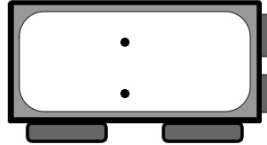
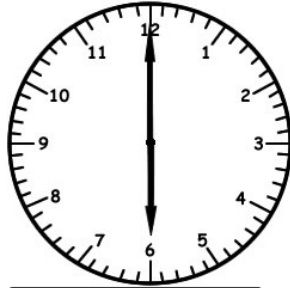
4)



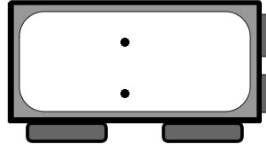
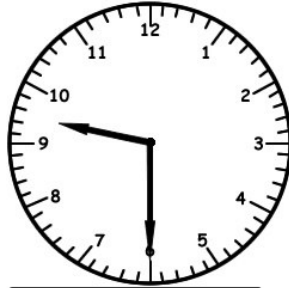
5)



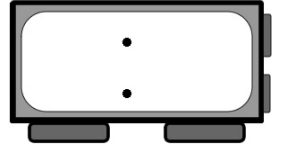

6)



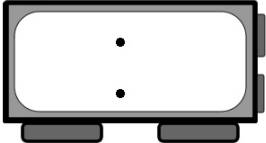
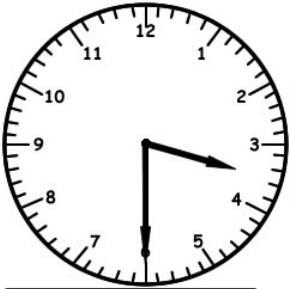
7)



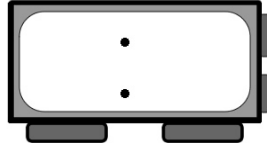
8)



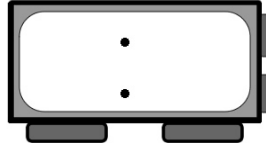
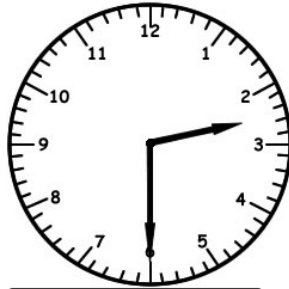
9)



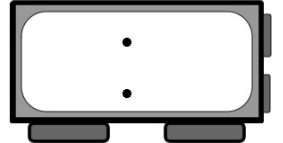

10)



11)




12)



Name: _____

Date: _____



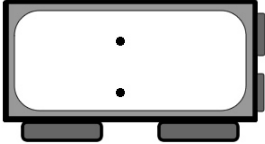
Telling Time

Half Hour Worksheet 2

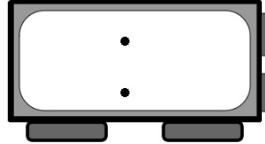


Write the time inside each clock below.

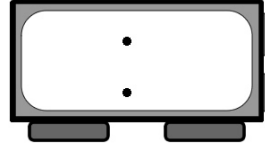
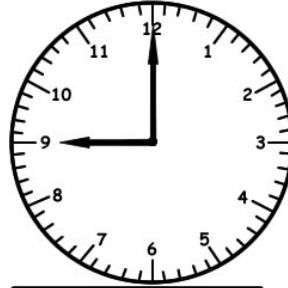
1)



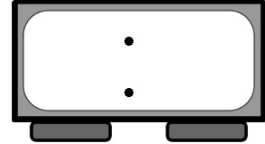
2)



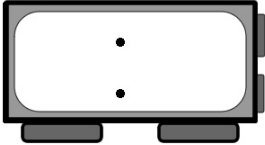
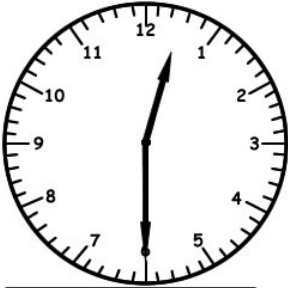
3)



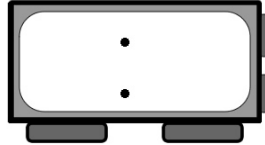
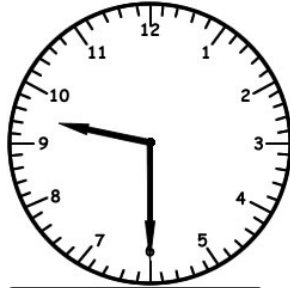
4)



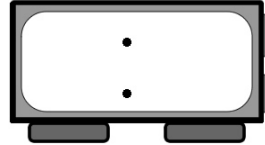
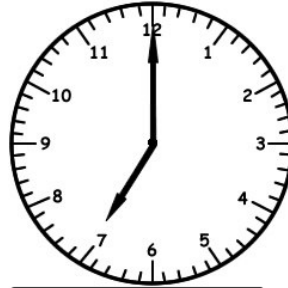
5)



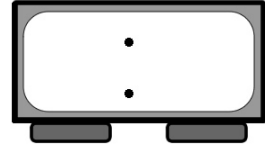

6)



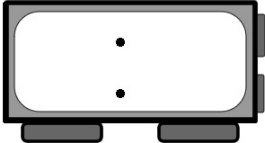
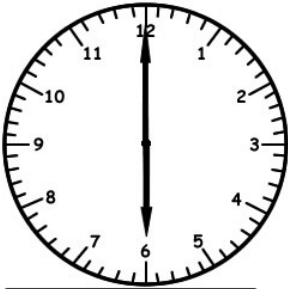
7)



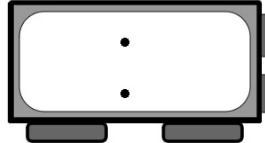
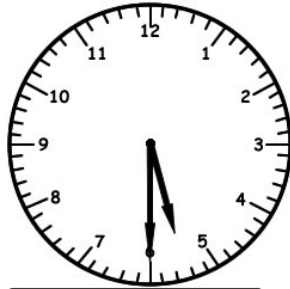
8)



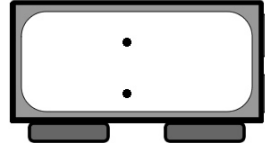

9)



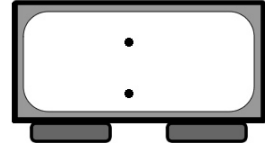
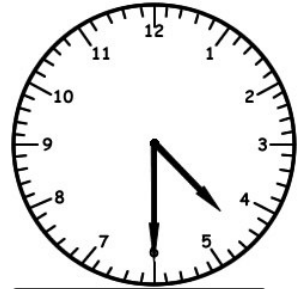
10)



11)




12)



Name: _____

Date: _____



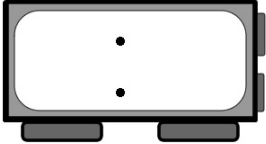
Telling Time

Half Hour Worksheet 3

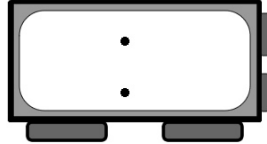
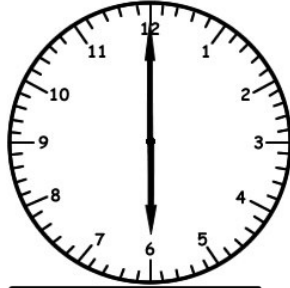


Write the time inside each clock below.

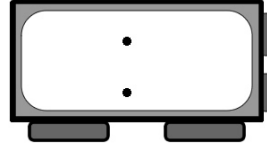
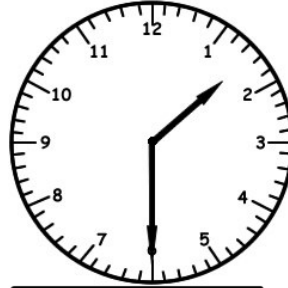
1)



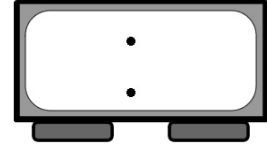
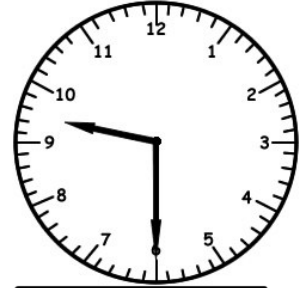
2)



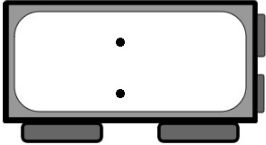
3)



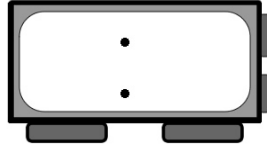

4)



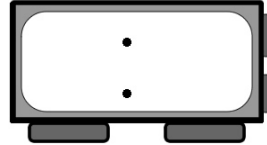
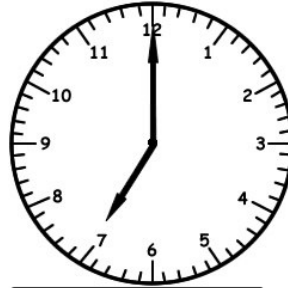
5)



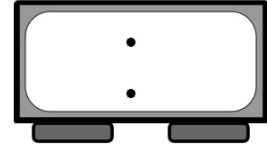

6)



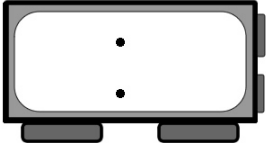

7)



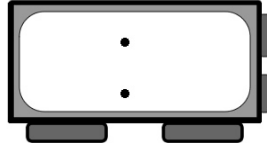
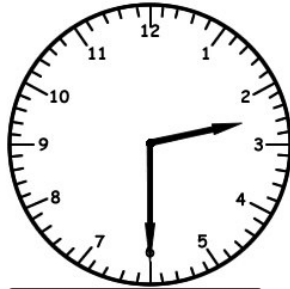
8)



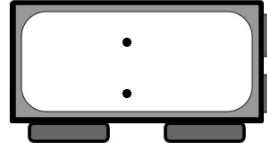
9)



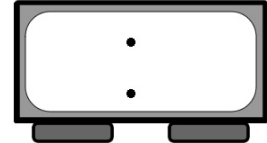
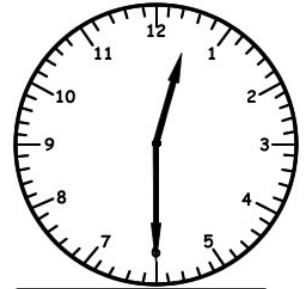
10)



11)




12)



Name: _____

Date: _____



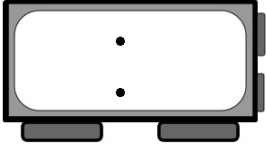
Telling Time

Half Hour Worksheet 4

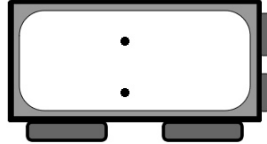
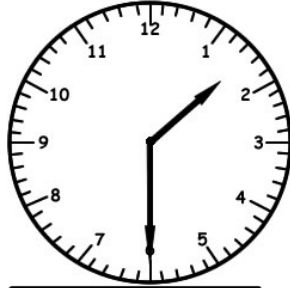


Write the time inside each clock below.

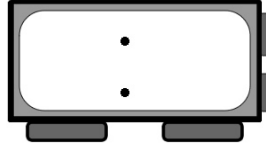
1)



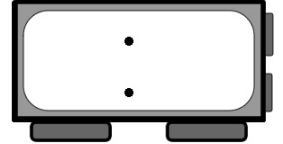
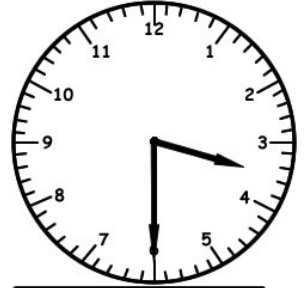
2)



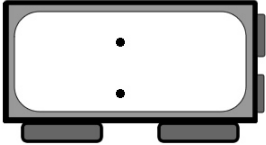

3)



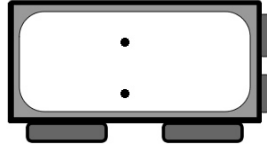
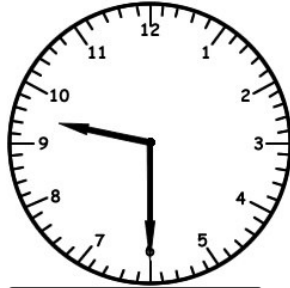
4)



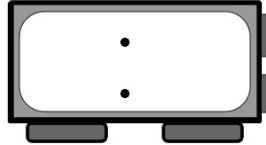

5)



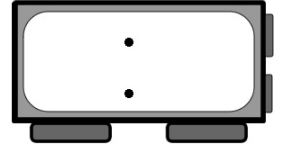
6)



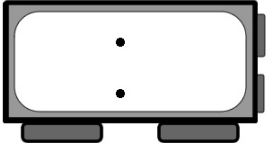
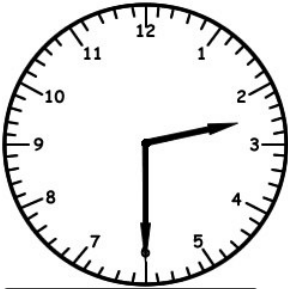
7)



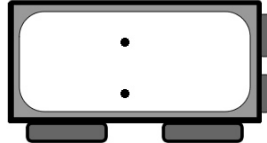
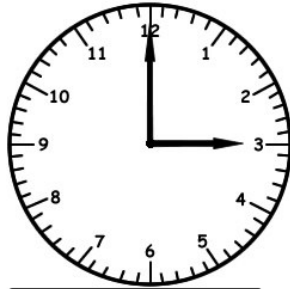
8)



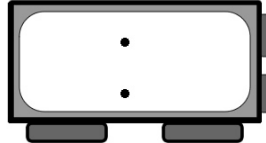
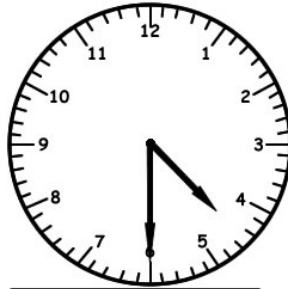
9)



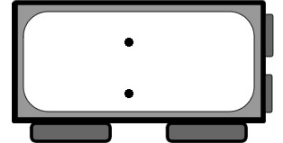
10)



11)




12)



Name: _____

Date: _____



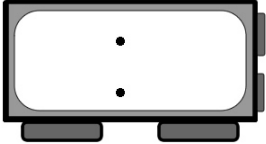
Telling Time

Half Hour Worksheet 5

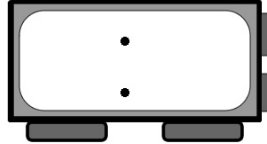
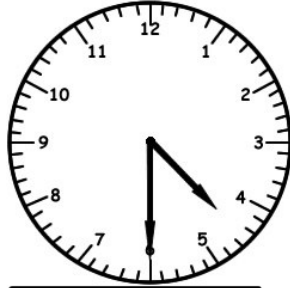


Write the time inside each clock below.

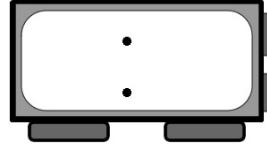
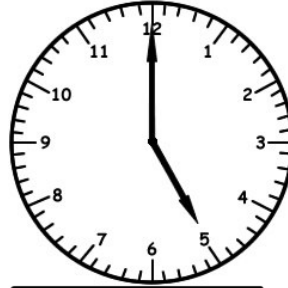
1)



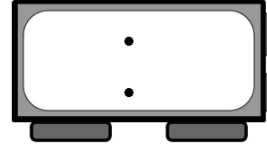
2)



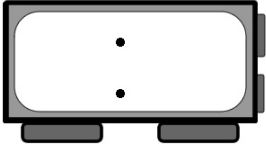
3)



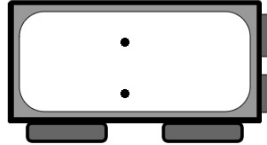

4)



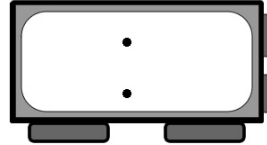
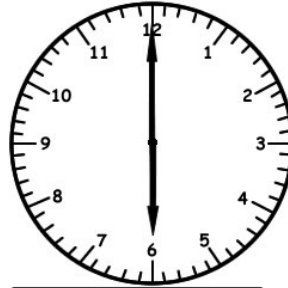
5)



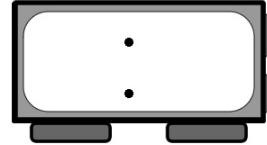
6)



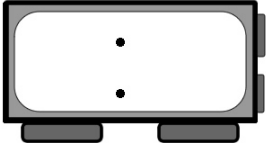

7)



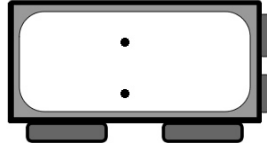
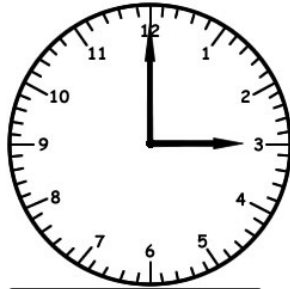
8)



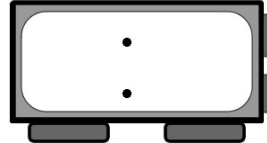
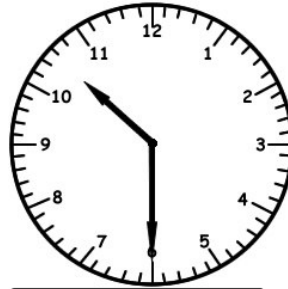
9)



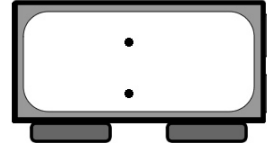
10)



11)




12)



Name: _____

Date: _____



Telling Time
Half Hour
Answer Key



Worksheets 1-5

Worksheet 1

- | | | | |
|---------|---------|---------|---------|
| 1)10:30 | 2)8:00 | 3)7:00 | 4)11:00 |
| 5)1:30 | 6)6:00 | 7)9:30 | 8)12:00 |
| 9)3:30 | 10)1:00 | 11)2:30 | 12)4:00 |

Worksheet 2

- | | | | |
|---------|---------|---------|---------|
| 1)8:00 | 2)7:30 | 3)9:00 | 4)10:00 |
| 5)12:30 | 6)9:30 | 7)7:00 | 8)3:00 |
| 9)6:00 | 10)5:30 | 11)2:00 | 12)4:30 |

Worksheet 3

- | | | | |
|---------|---------|---------|----------|
| 1)1:00 | 2)6:00 | 3)1:30 | 4)9:30 |
| 5)11:00 | 6)10:00 | 7)7:00 | 8)4:30 |
| 9)4:00 | 10)2:30 | 11)6:30 | 12)12:30 |

Worksheet 4

- | | | | |
|--------|---------|---------|---------|
| 1)7:00 | 2)1:30 | 3)10:00 | 4)3:30 |
| 5)7:00 | 6)9:30 | 7)11:30 | 8)2:00 |
| 9)2:30 | 10)3:00 | 11)4:30 | 12)6:30 |

Worksheet 5

- | | | | |
|---------|---------|----------|----------|
| 1)4:00 | 2)4:30 | 3)5:00 | 4)5:30 |
| 5)12:00 | 6)11:00 | 7)6:00 | 8)7:30 |
| 9)5:00 | 10)3:00 | 11)10:30 | 12)10:00 |